



Name _____

Class _____

- There are many different forms of transport. What do you think are the benefits and disadvantages of each type of transport listed below?

Car

Positive	Negative

Boat

Positive	Negative

Bus

Positive	Negative

Train

Positive	Negative

Plane

Positive	Negative

Bicycle

Positive	Negative



Name _____

Class _____

- You have seen how the Government might use a 'carrot or stick' approach to influence people's choice of transport. For each measure state why you thought it was a carrot or a stick.

Carrot or Stick?

Why?



Cycle Route



Pedestrian only street



No cars in bus lane



No entry into town centre



Higher car parking costs



Higher tax on petrol



Quality bus shelter



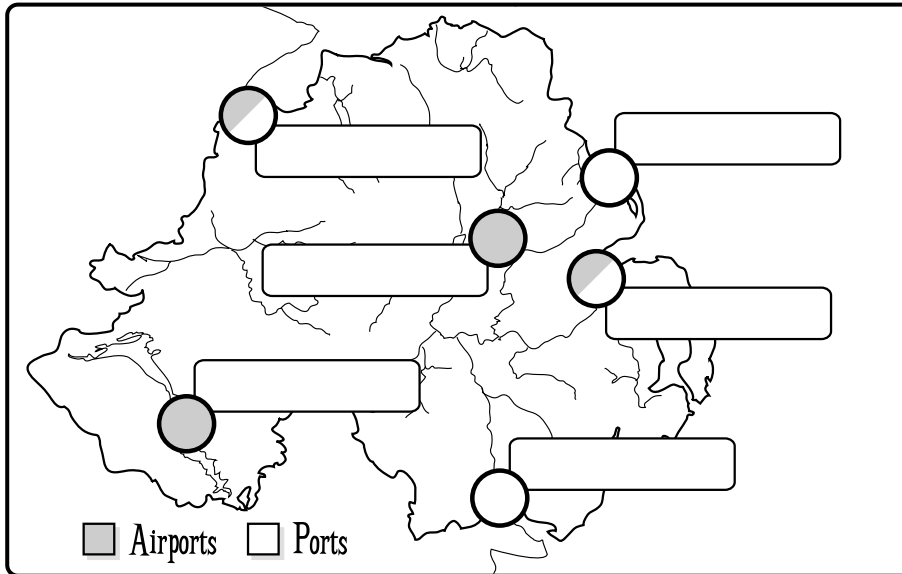
Fast, cheap, regular trains





Name _____ Class _____

- On the map below mark and name the main ports and airports for Northern Ireland.



- Describe the location of the ports and airports across N.I.

- Use the information on the web site map and in the fact files to help you answer the following questions.

Name Northern Ireland's 4 main ports. _____

Name 2 other smaller N.I. ports. _____

From which local airport can you fly to international destinations? _____

Which local airport has been one of the UK's fastest growing airports during the 1990s?

What is the name of the small airport near Enniskillen? _____

Who has expressed objections to plans to extend the runway at the City of Derry Airport?



Name _____

Class _____

- How often do you walk each week? How many journeys do you make in a car that are unnecessary? Keep a diary of your journeys for the next week. Give yourself 10 points for every 'walked journey' (not from the kitchen to the bedroom). Take away 10 points every time you make an unnecessary car journey. See how well you do at the end of the week!

	Walked Journeys	Walk Points (+)	Car Points (-)	Day Points	Car Journeys
Monday					
Tuesday					
Wednesday					
Thursday					
Friday					
Saturday					
Sunday					

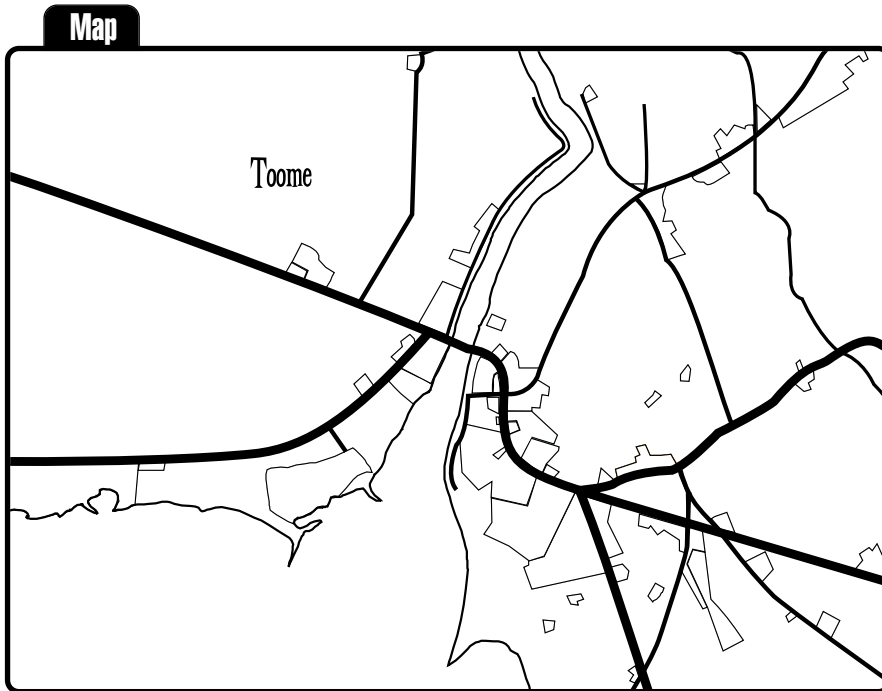
Are you in positive or negatives figures? Could you make a better effort?



Name _____

Class _____

- On the map below, shade in the different areas of Toome. Colour the key as well.



Key

- Main Residential
- Commercial
- Community Use
- Industrial Employ.
- Agricultural
- Bypass

- Now shade in red the proposed bypass route.
- Why do you think this route was chosen?

- In the space below describe the route of the bypass.



Name _____

Class _____

- There are many different opinions about the Toome Bypass. Match the opinions from the selection below to the correct person.

Una Johnston



Martin Short




Margaret Shivers




Siobhan Kearney



Robert Ditty



John Gregg



Opinions

There may be a few lean years but hopefully people will come to live in our area and that will improve our business in time.

Since the Castledawson bypass we have lost some early morning business but there has been a lot of new development and we have new customers.

At the moment it takes 45 minutes to get through Toome village.

Normally it takes 40 minutes to travel from Magherafelt to Belfast but if you hit the rush hour in Toome it can double your journey time.

My only concern would be the pollution or dirt or dust that will come from the bypass.

The roads will be safer for local children.

- Which person do you have most sympathy with? Why do you sympathise with them?
