



Name _____

Class _____

- Match the place to the photograph of the tourist destination. Use the place-names in the word bank below.


Word Bank

Spain Caribbean France Australia USA Nepal



Country: _____

Type of holiday: _____



Country: _____

Type of holiday: _____



Country: _____

Type of holiday: _____



Country: _____

Type of holiday: _____



Country: _____

Type of holiday: _____



Country: _____

Type of holiday: _____

- What type of tourism is shown? Use the words listed in the word bank below.

Word Bank

Theme Park Activity Adventure Cultural Beach



Name _____ Class _____

Look at the images below. What damage is being caused by tourism as shown in each of the photographs?



Damage:



Damage:



Damage:

- For one of the areas shown, what could be done to stop/prevent this damage?

Area:

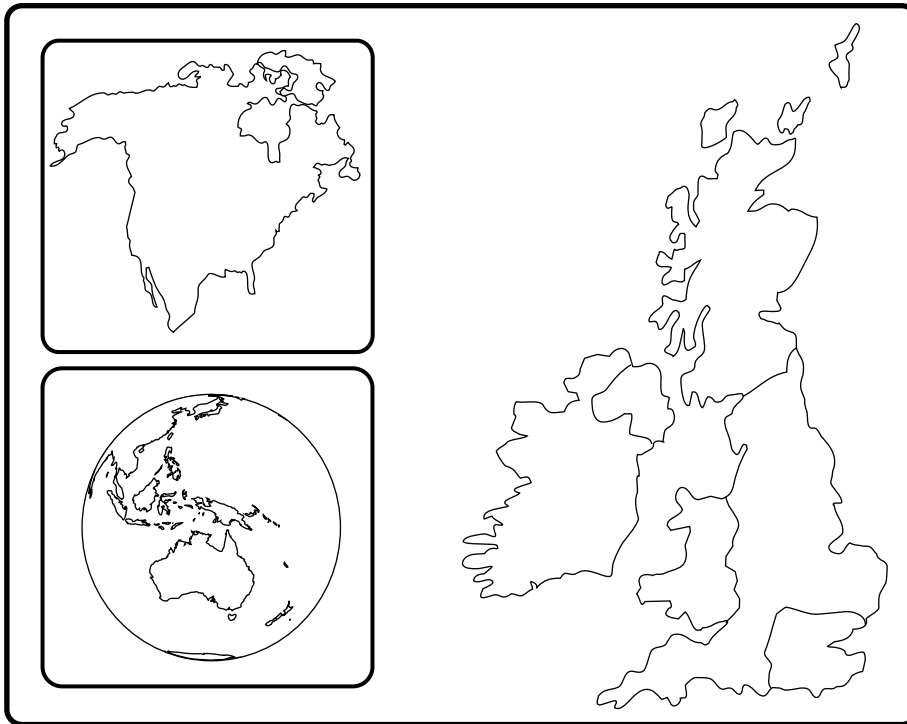
Suggestion:



Name _____

Class _____

- Complete the map below to create a flow chart. Using the information from the table, show where the visitors to Northern Ireland's tourist attractions come from. You should end up with a map like the one you created on the web site. Use the scale 1mm = 2%



Area	%	Area	%
London / S.E. England	16	Republic of Ireland	23
Rest of England	27	North America	7
Scotland	17	Europe	6
Wales	1	Rest of World	3

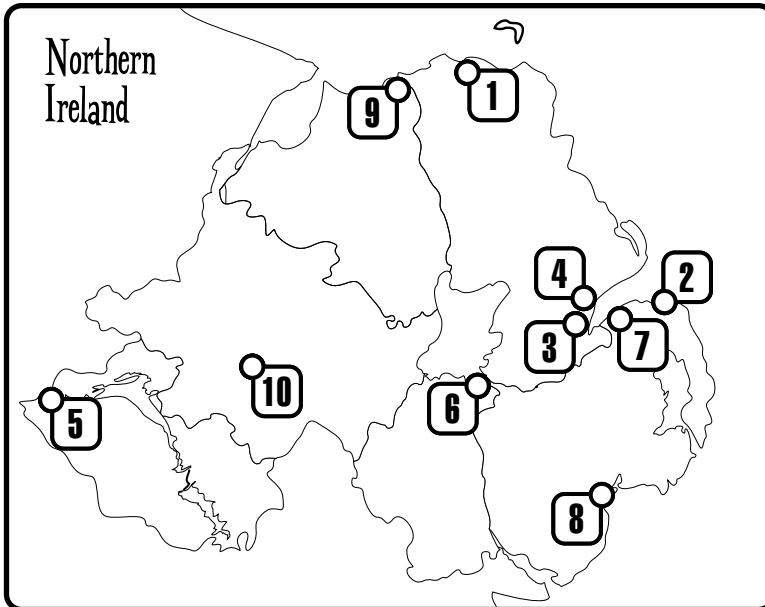
- Describe what the map shows.



Name _____

Class _____

- Complete the map of N.I. by shading each county. Complete the key.



Key	
<input type="checkbox"/>	Armagh
<input type="checkbox"/>	Antrim
<input type="checkbox"/>	Down
<input type="checkbox"/>	Londonderry
<input type="checkbox"/>	Tyrone
<input type="checkbox"/>	Fermanagh

- Complete the table below by answering the following...
 What attraction is shown by each number on the map?
 What county is each attraction in?
 What sort of attraction is it? E.g. beach, cultural...

Attractions	No. on Map	County	Type of Attraction
Giant's Causeway	_____	_____	_____
Pickie Family Fun Park	_____	_____	_____
Ulster Museum	_____	_____	_____
Belfast Zoo	_____	_____	_____
Belleek	_____	_____	_____
Oxford Island Nature Reserve	_____	_____	_____
Ulster Folk & Transport Museum	_____	_____	_____
Murlough National Nature Reserve	_____	_____	_____
Portstewart Strand	_____	_____	_____
Ulster American Folk Park	_____	_____	_____

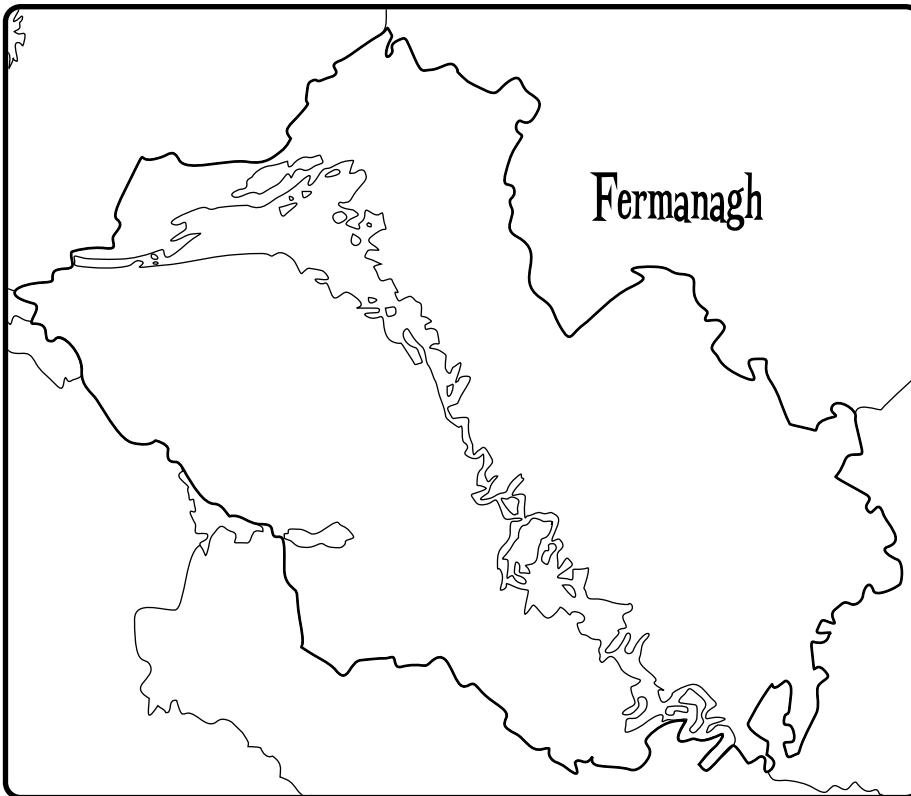


Name _____

Class _____

- Write in the correct features in the word bank below, on the correct place on the map.

Enniskillen Florence Court Upper Lough Erne
Marble Arch Caves Lower Lough Erne Belleek Pottery
Castle Archdale Lough Navar Crom Estate



Shade the land green and the water blue.

Land

Water

- Where would you like to visit and why?



Name _____

Class _____

- Complete the following passage using the words from the work bank below.

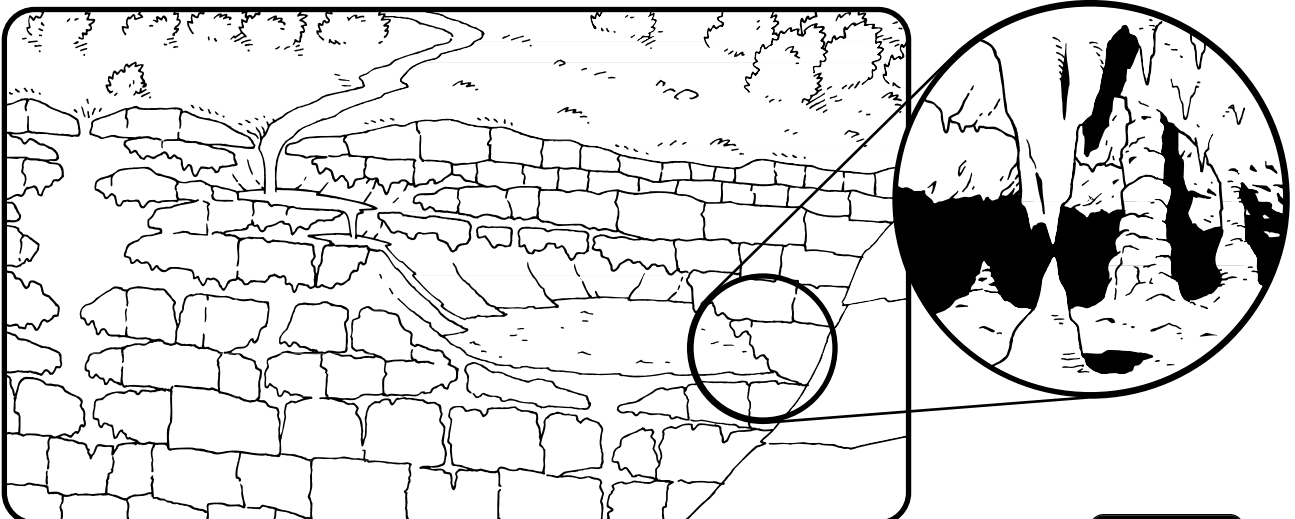
How the Marble Arch Caves were formed

Limestone is a rock made up from the _____ of tiny _____ creatures. This rock built up in _____ with horizontal _____ and vertical _____ . Water is able to pass along the joints and bedding planes, and is able to _____ the limestone. This flowing water forms _____ and _____ underground when the tiny bits of eroded limestone are left behind or _____ , stalactites which _____ and _____ which grow upwards are formed.

Word Bank

Hang down Caves Caverns Bedding planes Joints
 Shells Stalagmites Layers Deposited Erode Sea

- Add the correct labels to the diagram below.



Word Bank

Shallow Hole Bedding Planes Stalactites Caves
 Joints Pillar Stalagmites